

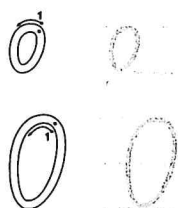


Monday

Practice—Letter formation



Trace, then write the lower case and capital letter.



Trace, then write the words.

so of too poor igloo onion cocoon

Trace, then write the sentence.

Oscar loves to go to the zoo.

Trace, then write a rhyming word to match each word.

look

wood

boot

hoop

cool

room

Unit 2

o saying u

-ck



Look



Say



Trace



Cover



Write



Check

List Words

Practise

Practise

T

D

love				
above				
oven				
cover				
mother				
brother				
another				
other				
Monday				
front				
onion				
back				
trick				
brick				
shock				
luck				
Ireland				
March				

Antonyms

Antonyms are words with the opposite meaning. 'Hot' and 'cold' are antonyms.

1. Find a list word with the opposite meaning.

- (a) father _____
- (b) below _____
- (c) hate _____
- (d) sister _____

Word Maker

2. Join 'ck' to the end of the letters in the circles to make new words.

sho

tri

ck

bri

DAY 19

1. Correct the spelling mistake.

I'll wait here wile you are in the shop.

2. Circle the word with the correct spelling.

funny funy funnee

3. Circle the word rhyming with
- blow**
- .

now down grow

4. Draw a line to show the syllables.

l a d y

5. Circle the word that means
- I will**
- .

I'm I'll

6. The plural of the word
- brush**
- is

7. Write . or ! in the box.

Let's take the dog for a walk

8. Circle the verb.

The girl jumped into the swimming pool.

9. Which word describes how the girl dived?

The girl dived safely into the pool.

10. Circle the two words that make the verb group.

The girl will swim all the way.

MY SCORE

DAY 20

1. Circle the word with the correct spelling.

barth bath barthe

2. Correct the spelling mistake.

A lion and a cheetah run very farsi.

3. Circle the word rhyming with
- hear**
- .

pear bear year

4. Draw a line to show the syllables.

b e l o w

- 5.
- We're**
- means

6. Write the plural of
- bench**
- .

7. Write ? or ! in the box.

Can you see the snail on the plant

8. The word

The dog chewed a bone.

9. Which word is an adverb that describes how the dog panted?

The dog panted noisily.

10. Circle the two words that make the verb group.

The dog is digging a big hole.

MY SCORE

Spelling Word Puzzle

Name:



Word Count:

E	T	R	A
H	G	A	B
L	J	N	G
U	H	M	E

This image shows a single page from a notebook or ledger. The page is white with a dark border. It features approximately 20 horizontal ruling lines spaced evenly down the page. There are no margins, text, or other markings on the page.

How to stop me bugging you

- 1 Hey, Dad! You know the pile of wood in our yard? I have an idea how we can use it that will stop me annoying you on the weekends!
- 2 We can make a cubbyhouse! If we use all the old wood we already have, we can help the environment. And using it to make something will help tidy up our garden.
- 3 It won't cost much. We can find free plans on the internet. I don't think it will be too hard. We have all the tools we need, like hammers and nails. And of course, I'll help you.
- 4 If I have a cubbyhouse, I will be so busy playing I won't get bored! So I won't annoy you at the weekend.
- 5 So come on, Dad. Let's build a cubbyhouse this weekend!



1. The word **annoy** in Paragraph 4 means to:

- (a) *bother someone.*
- (b) *make someone happy.*
- (c) *make something.*

2. Where does the author think they can get plans for a cubby?

- (a) *from the internet*
- (b) *from a shop*
- (c) *from a television show*

3. Paragraph 2 tells mainly:

- (a) *how much a cubbyhouse will cost.*
- (b) *why building a cubbyhouse is a good idea.*
- (c) *when to build a cubbyhouse.*

4. Why does the author want a cubbyhouse?


- (a) *to annoy his or her dad*
- (b) *to get strong*
- (c) *to play in*

5. Which answer is a fact? Cubbyhouses are:

- (a) *playhouses for children.*
- (b) *great fun.*
- (c) *easy to build.*

6. The word **it** in Paragraph 2 is used instead of the:

- (a) *cubbyhouse.*
- (b) *wood.*
- (c) *environment.*



Something extra

- ★ Write what you would like to ask an adult to build for you.
- ★ What else could be made from scraps of wood? List four things.

Daily Schedule for Term 3 Booklet D - Week 9

My Dad – Letter

Draw a picture of Dad and write a letter to him

--

Dear Dad,

[illegible]

This image shows a single page of white paper with horizontal ruling lines. The lines are evenly spaced and run across the width of the page. There are no margins, text, or other markings on the paper.

UNIT 3


LEVEL 1

1. $6 + 0 + 3 = \square$

2. 15 cents – 5 cents

3. How many is 2 more than 8?

4. Circle the shortest building.



5. $6 + \square = 9$

6. What fraction of the shape is coloured?



7. 2, 4, 6, 8, \square


8. Which coloured car is in the middle?

9. $14 - \square = 10$



10. $\$10 - \$3 = \$\square$

11. What is the day after Sunday?



12. 20 cents + 10 cents

13. $\$5 + \$5 + \$2$

14. How many sides has a triangle?

15. Circle the larger number: **37** **39**

16. What is the time shown on the clock?



17. How many is five more than ten?

18. How much does Jess have? $\$1$ $\$2$ $\$2$ $\$2$

19. How much for 2 cakes at \$10 each?

20. How many wheels on the bicycles?

LEVEL 2

1. $\$10 + \$10 + \$10 + \$10 = \square$

2. $20 + 20 = \square$

3. $60 - 10 = \square$

4. Double 5



5. 3, 6, 9, 12, \square

6. What number is between 38 and 40?

7. Write in descending order: **36** **29** **41** **46**

8. Which clock shows the earliest time in the day?

9. Add 10 to 5.



a.



b.



c.

10. Halve 12

11. Which coloured ball is third from the right?



12. How many is ten less than thirty?

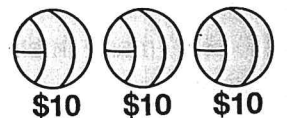
13. How many shoes in 6 pairs?



14. $4 + 4 + 4 = \square$

15. There are 12 girls and 6 boys. How many children altogether?

16. How much for the 3 balls?



17. Total of \$20, \$5 and \$2

18. Subtract \$30 from \$80.

19. What is the sum of 10 and 7?



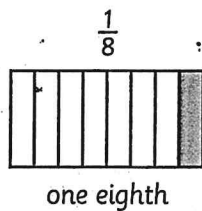
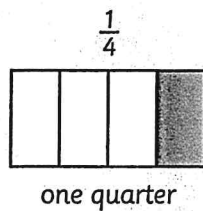
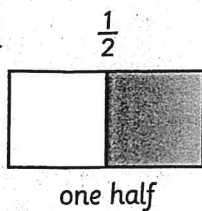
20. What is the total mass of the three bicycles?



1:02 Naming fractions

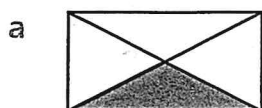


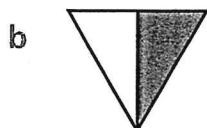
Concepts




One eighth means one out of eight equal parts.

1 What part of each shape has been coloured?

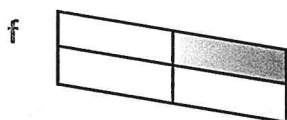


















2 What part of each group has been coloured?

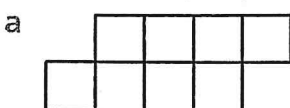









3 Colour part of each shape to match the given fraction.



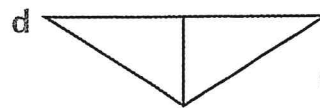
$\frac{1}{8}$



$\frac{1}{4}$

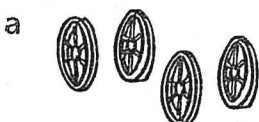


$\frac{1}{4}$



$\frac{1}{2}$


4 Colour part of each group to match the given fraction.




$\frac{1}{4}$



$\frac{1}{2}$




$\frac{1}{4}$




$\frac{1}{8}$




$\frac{1}{2}$



$\frac{1}{8}$



$\frac{1}{2}$



$\frac{1}{4}$

The Miracles of Jesus!

G	J	J	E	S	U	S	A	P	J
B	G	R	O	O	M	X	L	D	P
E	M	I	R	A	C	L	E	W	G
S	I	C	K	N	E	S	S	R	Q
B	U	C	S	G	R	I	S	O	F
R	P	U	X	B	U	K	K	F	A
I	L	L	N	E	S	S	E	V	I
D	X	K	L	F	E	A	S	T	T
E	V	H	E	A	L	E	D	T	H
E	U	S	E	R	V	A	N	T	S



SICKNESS
MIRACLE
BRIDE
GROOM
SERVANTS

HEALED
ILLNESS
JESUS
FAITH
FEAST

