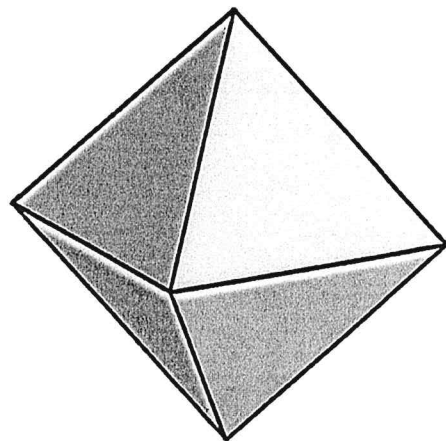

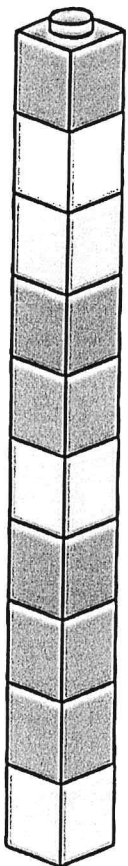

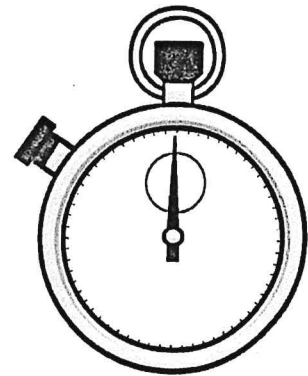
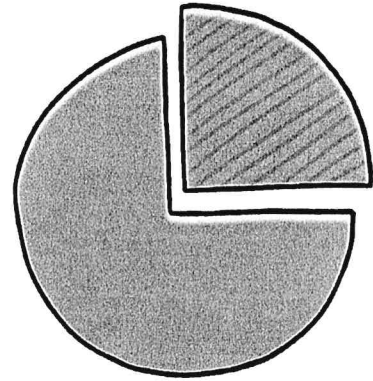


Mathematics



Column Subtraction (With Exchanging)

a.				b.				c.				d.				e.			
	2	3			2	6			2	2			3	8			2	1	
-	1	7		-	1	9		-	1	6		-	2	9		-	1	3	
f.				g.				h.				i.				j.			
	3	3			4	4			4	7			3	8			4	1	
-	1	5		-	2	7		-	1	8		-	1	9		-	2	6	
k.				l.				m.				n.				o.			
	4	5			4	0			4	1			5	6			5	2	
-	2	9		-	2	8		-	1	7		-	3	7		-	3	8	
p.				q.				r.				s.				t.			
	5	0			5	6			6	2			6	1			5	7	
-	2	7		-	1	8		-	3	5		-	2	6		-	2	9	
u.				v.				w.				x.				y.			
	7	1			6	2			6	6			8	5			7	5	
-	4	3		-	3	8		-	3	9		-	4	8		-	4	6	

Column Subtraction (No Exchanging)

a.				b.				c.				d.				e.			
	3	3			2	5			1	6			2	7			2	9	
-	1	1		-	1	3		-	1	0		-	1	6		-	1	2	
f.				g.				h.				i.				j.			
	2	6			3	2			2	9			4	2			2	7	
-	1	3		-	2	0		-	1	4		-	1	2		-	2	3	
k.				l.				m.				n.				o.			
	2	7			3	8			4	8			3	3			3	9	
-	1	2		-	2	7		-	3	6		-	1	3		-	2	1	
p.				q.				r.				s.				t.			
	4	6			5	8			6	3			7	6			5	9	
-	2	2		-	2	5		-	3	1		-	5	5		-	3	7	
u.				v.				w.				x.				y.			
	8	4			7	6			6	7			5	8			8	5	
-	6	0		-	4	5		-	4	4		-	3	6		-	5	2	

Subtracting 2-Digit Numbers from 2-Digit Numbers - with Exchanging

LO: To use column addition and subtraction.

Calculate the answer to the following:

$\begin{array}{r} 75 \\ - 16 \\ \hline \\ \hline \end{array}$	$\begin{array}{r} 41 \\ - 25 \\ \hline \\ \hline \end{array}$	$\begin{array}{r} 72 \\ - 57 \\ \hline \\ \hline \end{array}$	$\begin{array}{r} 73 \\ - 38 \\ \hline \\ \hline \end{array}$
$\begin{array}{r} 20 \\ - 16 \\ \hline \\ \hline \end{array}$	$\begin{array}{r} 62 \\ - 44 \\ \hline \\ \hline \end{array}$	$\begin{array}{r} 41 \\ - 33 \\ \hline \\ \hline \end{array}$	$\begin{array}{r} 82 \\ - 67 \\ \hline \\ \hline \end{array}$
$\begin{array}{r} 31 \\ - 26 \\ \hline \\ \hline \end{array}$	$\begin{array}{r} 82 \\ - 55 \\ \hline \\ \hline \end{array}$	$\begin{array}{r} 64 \\ - 47 \\ \hline \\ \hline \end{array}$	$\begin{array}{r} 91 \\ - 53 \\ \hline \\ \hline \end{array}$

Challenge: Complete the following calculations:

$\begin{array}{r} _ 2 \\ - 3 _ \\ \hline 16 \\ \hline \end{array}$	$\begin{array}{r} 7 _ \\ - _ 4 \\ \hline 49 \\ \hline \end{array}$	$\begin{array}{r} _ 1 \\ - 6 _ \\ \hline 24 \\ \hline \end{array}$
--	--	--

Subtracting 2-Digit Numbers from 3-Digit Numbers - with Exchanging

Calculate the answer to the following:

$$\begin{array}{r} 1. \quad 343 \\ - \quad 18 \\ \hline \\ \hline \end{array}$$

$$\begin{array}{r} 2. \quad 641 \\ - \quad 25 \\ \hline \\ \hline \end{array}$$

$$\begin{array}{r} 3. \quad 472 \\ - \quad 67 \\ \hline \\ \hline \end{array}$$

$$\begin{array}{r} 4. \quad 473 \\ - \quad 38 \\ \hline \\ \hline \end{array}$$

$$\begin{array}{r} 5. \quad 620 \\ - \quad 16 \\ \hline \\ \hline \end{array}$$

$$\begin{array}{r} 6. \quad 364 \\ - \quad 46 \\ \hline \\ \hline \end{array}$$

$$\begin{array}{r} 7. \quad 415 \\ - \quad 33 \\ \hline \\ \hline \end{array}$$

$$\begin{array}{r} 8. \quad 528 \\ - \quad 67 \\ \hline \\ \hline \end{array}$$

$$\begin{array}{r} 9. \quad 126 \\ - \quad 31 \\ \hline \\ \hline \end{array}$$

$$\begin{array}{r} 10. \quad 673 \\ - \quad 82 \\ \hline \\ \hline \end{array}$$

$$\begin{array}{r} 11. \quad 607 \\ - \quad 64 \\ \hline \\ \hline \end{array}$$

$$\begin{array}{r} 12. \quad 916 \\ - \quad 53 \\ \hline \\ \hline \end{array}$$

Challenge: Complete the following calculations:

$$\begin{array}{r} 1. \quad 2_2 \\ - \quad 3_ \\ \hline 220 \\ \hline \end{array}$$

$$\begin{array}{r} 2. \quad 47_ \\ - \quad _4 \\ \hline 449 \\ \hline \end{array}$$

$$\begin{array}{r} 3. \quad 8_1 \\ - \quad 6_ \\ \hline _24 \\ \hline \end{array}$$

Subtracting 2-Digit Numbers from 3-Digit Numbers - with Exchanging

Calculate the answer to the following:

$$\begin{array}{r} 1. \quad 345 \\ - \quad 28 \\ \hline \\ \hline \end{array}$$

$$\begin{array}{r} 2. \quad 577 \\ - \quad 48 \\ \hline \\ \hline \end{array}$$

$$\begin{array}{r} 3. \quad 985 \\ - \quad 56 \\ \hline \\ \hline \end{array}$$

$$\begin{array}{r} 4. \quad 841 \\ - \quad 25 \\ \hline \\ \hline \end{array}$$

$$\begin{array}{r} 5. \quad 777 \\ - \quad 38 \\ \hline \\ \hline \end{array}$$

$$\begin{array}{r} 6. \quad 636 \\ - \quad 19 \\ \hline \\ \hline \end{array}$$

$$\begin{array}{r} 7. \quad 442 \\ - \quad 25 \\ \hline \\ \hline \end{array}$$

$$\begin{array}{r} 8. \quad 782 \\ - \quad 44 \\ \hline \\ \hline \end{array}$$

$$\begin{array}{r} 9. \quad 765 \\ - \quad 47 \\ \hline \\ \hline \end{array}$$

$$\begin{array}{r} 10. \quad 587 \\ - \quad 28 \\ \hline \\ \hline \end{array}$$

$$\begin{array}{r} 11. \quad 878 \\ - \quad 39 \\ \hline \\ \hline \end{array}$$

$$\begin{array}{r} 12. \quad 792 \\ - \quad 63 \\ \hline \\ \hline \end{array}$$

Challenge: Complete the following calculations:

$$\begin{array}{r} 1. \quad 5_5 \\ - \quad 2_ \\ \hline 518 \\ \hline \end{array}$$

$$\begin{array}{r} 2. \quad 47_ \\ - \quad _8 \\ \hline 415 \\ \hline \end{array}$$

$$\begin{array}{r} 3. \quad 7_5 \\ - \quad _9 \\ \hline _16 \\ \hline \end{array}$$

Subtracting 3-Digit Numbers from 3-Digit Numbers - with Exchanging

Calculate the answer to the following:

$$\begin{array}{r} 1. \quad 834 \\ - 658 \\ \hline \\ \hline \end{array}$$

$$\begin{array}{r} 2. \quad 754 \\ - 298 \\ \hline \\ \hline \end{array}$$

$$\begin{array}{r} 3. \quad 634 \\ - 465 \\ \hline \\ \hline \end{array}$$

$$\begin{array}{r} 4. \quad 584 \\ - 295 \\ \hline \\ \hline \end{array}$$

$$\begin{array}{r} 5. \quad 667 \\ - 378 \\ \hline \\ \hline \end{array}$$

$$\begin{array}{r} 6. \quad 765 \\ - 477 \\ \hline \\ \hline \end{array}$$

$$\begin{array}{r} 7. \quad 922 \\ - 648 \\ \hline \\ \hline \end{array}$$

$$\begin{array}{r} 8. \quad 902 \\ - 343 \\ \hline \\ \hline \end{array}$$

$$\begin{array}{r} 9. \quad 367 \\ - 188 \\ \hline \\ \hline \end{array}$$

$$\begin{array}{r} 10. \quad 673 \\ - 395 \\ \hline \\ \hline \end{array}$$

$$\begin{array}{r} 11. \quad 700 \\ - 314 \\ \hline \\ \hline \end{array}$$

$$\begin{array}{r} 12. \quad 805 \\ - 518 \\ \hline \\ \hline \end{array}$$

Challenge: Complete the following calculations:

$$\begin{array}{r} 1. \quad 4_3 \\ - 29_ \\ \hline 159 \\ \hline \end{array}$$

$$\begin{array}{r} 2. \quad 70_ \\ - 2_8 \\ \hline 427 \\ \hline \end{array}$$

$$\begin{array}{r} 3. \quad _ _ 13 \\ - 37_ \\ \hline _ _ 35 \\ \hline \end{array}$$